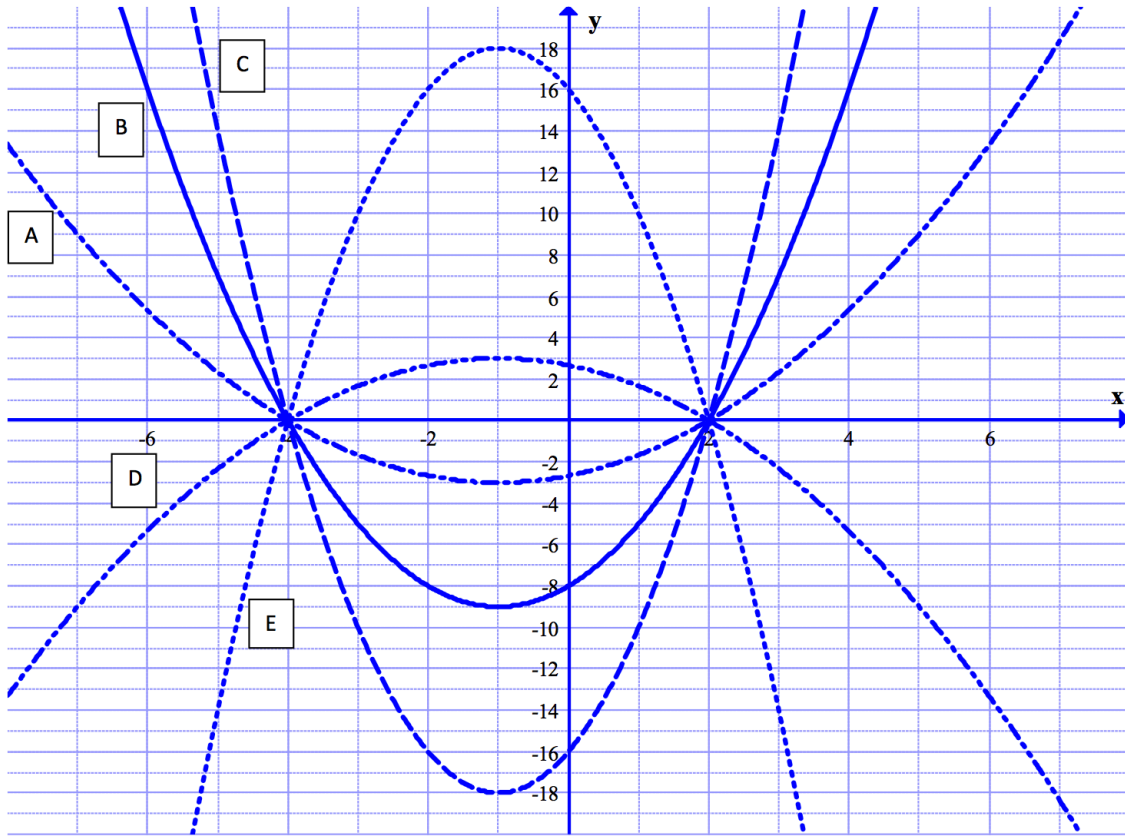


Name: \_\_\_\_\_

Block: \_\_\_\_\_

## Fun Multiple Graphs

I. For each of the below graphs (A-through-E), fill in the below table.  
 You CAN use your calculator to verify your graphs and results.



Graph	Zeros	Vertex	Write as $a(x - h)^2 + k$	Write as factored form $a(x - x_1)(x - x_2)$	y-intercept (Calculate)
A					
B					
C					
D					
E					

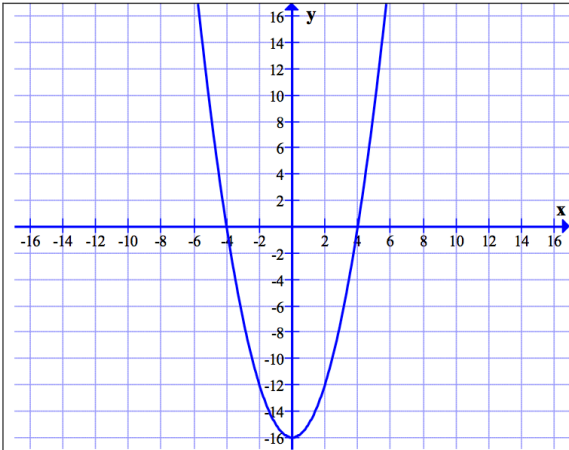
Name: \_\_\_\_\_

Block: \_\_\_\_\_

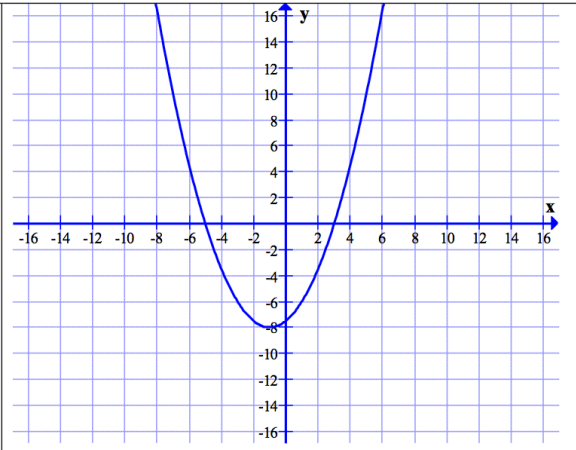
I. For each of the below graphs (A-through-D), fill in the below table.

You CAN use your calculator to verify your graphs and results.

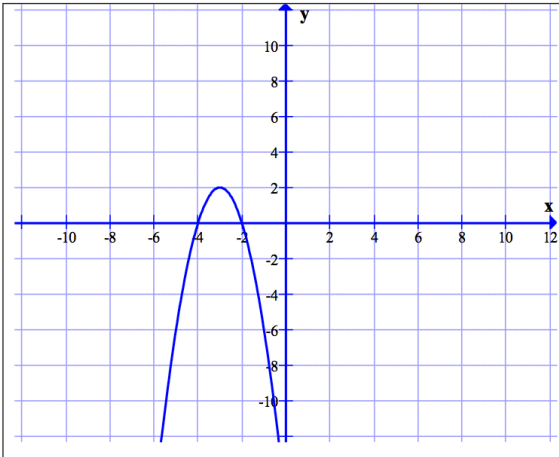
a.



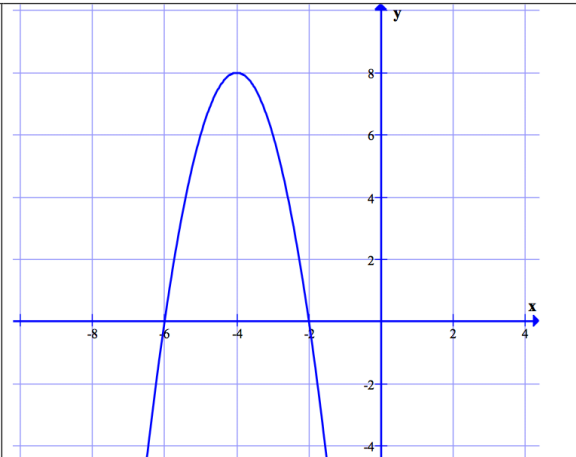
b.



c.



d.



Graph	Zeros	Vertex	Write as $a(x - h)^2 + k$	Write as factored form $a(x - x_1)(x - x_2)$	y-intercept (Calculate)
A					
B					
C					
D					

=== End ===